

# GWALIOR GLORY SCHOOL

Class : III

## SUMMER HOLIDAY HOMEWORK ENGLISH (2024-25)

Name : \_\_\_\_\_ Sec. : \_\_\_\_\_ Roll No. : \_\_\_\_\_ Date : \_\_\_\_\_

Q1. NOUNS IN THE FALL: Color the nouns using the color code given.

<b>Person</b> 	<b>Place</b> 	<b>Thing</b> 
-------------------------------------------------------------------------------------------------	-------------------------------------------------------------------------------------------------	--------------------------------------------------------------------------------------------------

cap Dad cat pen shop

sun hut food

park Sam

rock home cup

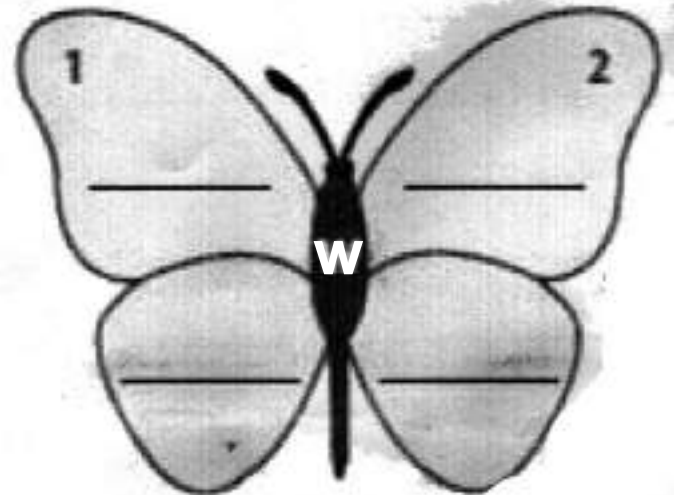
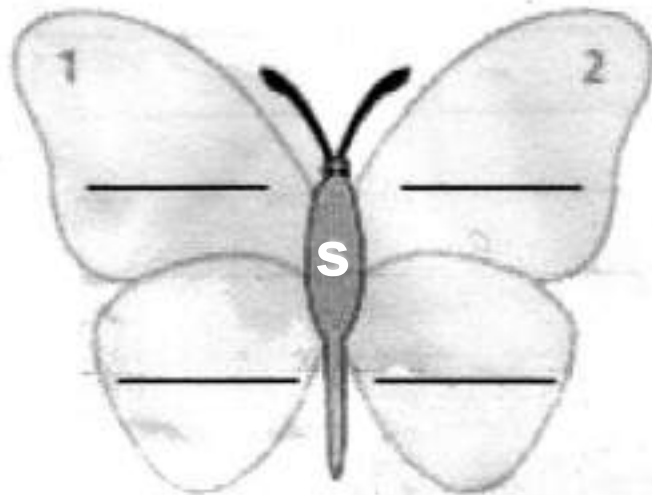
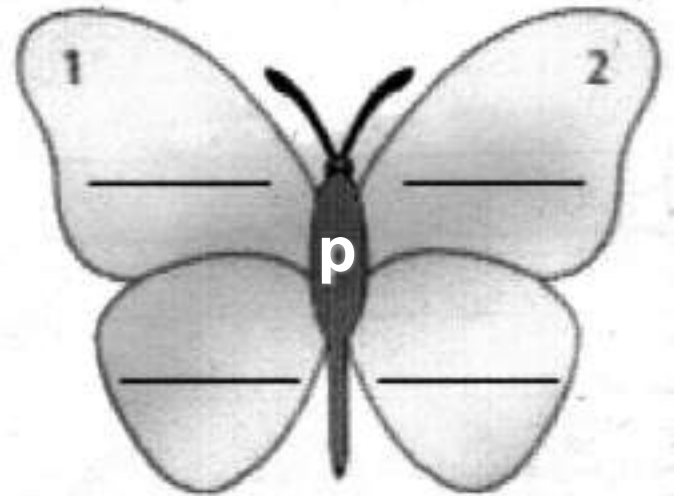
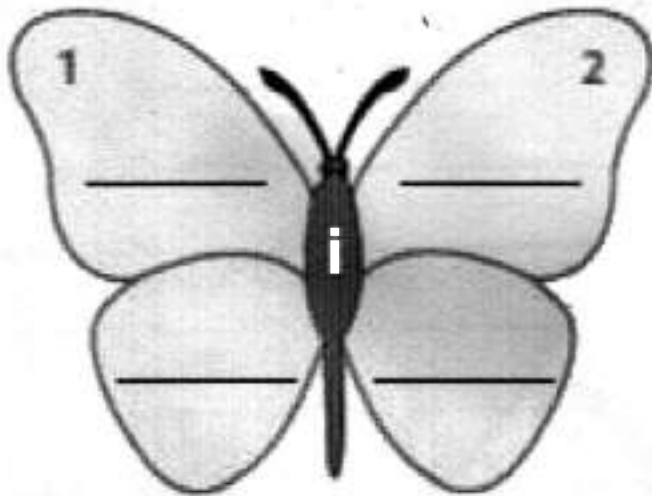
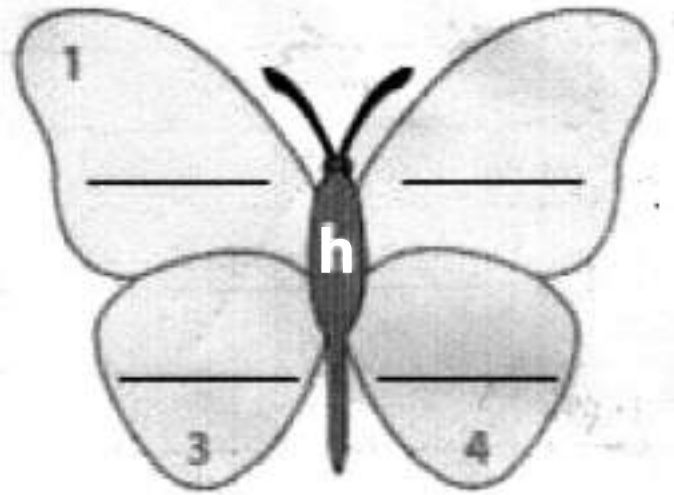
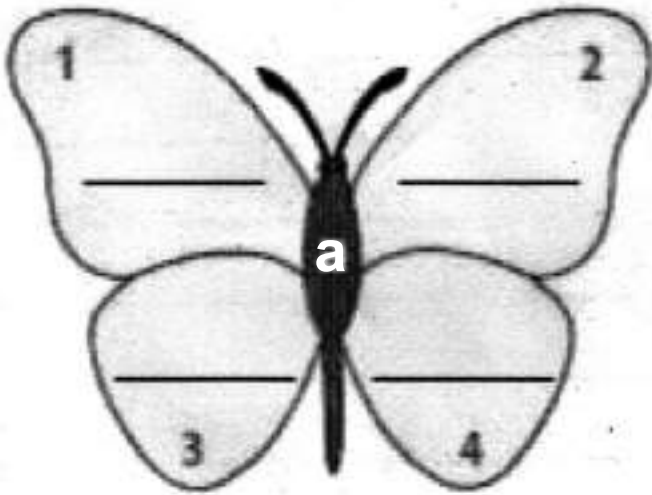
car beach Mom

girl bike boy

Tom sock dog

Q2. Sort the words by their first letter and arrange them alphabetically?

air	health	parent	winter	idea	wax
photo	actor	snake	island	pen	woman
animal	hope	play	speech	image	horse
hat	score	ink	area	walk	sad



Q3. Read and answer:

# Jacob's Daily Routine



*A) Read the story.*

This is me, Jacob. I am nine years old. I always start my fresh day by waking up at 7:50 in the morning. Then, I go to brush my teeth because it is the most important thing to do every day. School starts at 8:30 in the morning. I go to the bedroom and dress up. Then, I need to eat breakfast with my family. After that, I go to school at 8:15 because I don't want to be late. At lunchtime, I usually have a conversation with my friend, Jake. Before school ends, I always say goodbye to my teachers. My favourite teacher is Mr. Greyson. He is always very friendly! At 2:50 p.m., I went home, I see my sister is playing with my toy! She always does this, but I let her permission to use my toy. At 6 p.m., I do my homework. At 10 p.m., I am in my bed and sleep for some wonderful dreams!

**B) Answer the questions after reading the story.**

Name: \_\_\_\_\_

1. What time does he wake up in the morning?  
\_\_\_\_\_
2. Why does he brush his teeth everyday?  
\_\_\_\_\_
3. What time does his school start? \_\_\_\_\_
4. Who is his favourite teacher? \_\_\_\_\_
5. Who is his friend? \_\_\_\_\_
6. Does his sister play with his toy? \_\_\_\_\_
7. What he does at 6 p.m.? \_\_\_\_\_
8. What he does at 10 p.m.? \_\_\_\_\_

**C) Circle True or False:**

1. Jacob is 11-year old. (T/F)
2. He eats breakfast with his family. (T/F)
3. He doesn't say goodbye to his teachers. (T/F)
4. At lunchtime. He talks with his friend. (T/F)

**Q4. Write the words in the correct order to make meaningful sentences. Remember to use capital letters and full stops:**

- 1) and / like / i / curd / eat / to / rice \_\_\_\_\_  
\_\_\_\_\_
- 2) can / i / ride / bike / a \_\_\_\_\_
- 3) coffee / and / like / i / tea \_\_\_\_\_
- 4) is / my / green / this / coat \_\_\_\_\_
- 5) have / i / new / got / shoes \_\_\_\_\_
- 6) is / Ali's / this / hat \_\_\_\_\_
- 7) bedrooms / three / we / got / have \_\_\_\_\_
- 8) kitchen / big / a / i / got / have \_\_\_\_\_
- 9) Sand / strawberry / ice cream / likes \_\_\_\_\_
- 10) bathroom / tiny / is / my \_\_\_\_\_

**Q5. ADJECTIVE WORD CHALLENGE:**

**An adjective is a word that describes a noun.**

- 1) Name 3 adjectives that describe an apple.  
\_\_\_\_\_
- 2) Name 2 adjectives that describe a zombie or another kind of monster.  
\_\_\_\_\_
- 3) Name 3 adjectives that start with the letter w.  
\_\_\_\_\_
- 4) Name 3 adjectives that describe you.  
\_\_\_\_\_
- 5) Name 3 adjectives that describe your favorite food.  
\_\_\_\_\_
- 6) Write an adjective to describe the following nouns:  
a \_\_\_\_\_ squirrel      a \_\_\_\_\_ snake      a \_\_\_\_\_ cat

**Q6. ENHANCE YOUR CREATIVE SKILLS:**

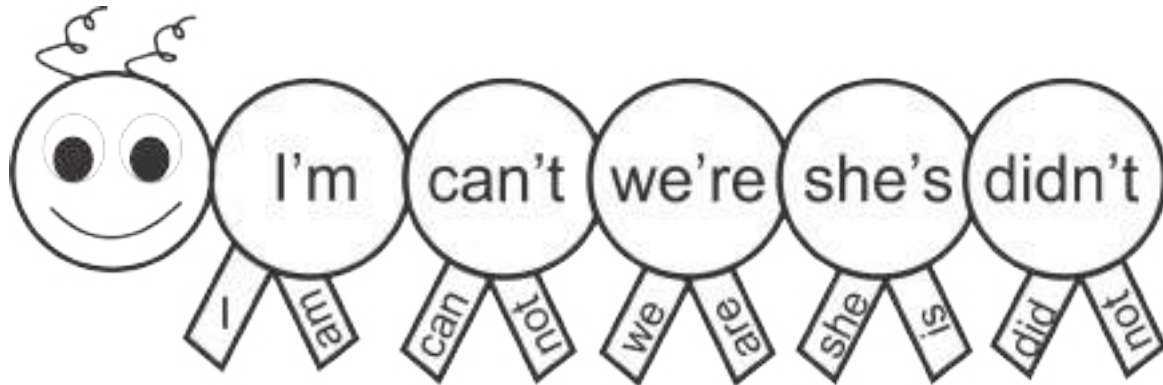
**Contractions!**

**I made myself a contraction,**

**As shortened as can be.**

**I thought I'd put two words together**

**Simple, can't you see?**



- # Refer to the picture given and prepare a 'contraction caterpillar' with at least 10 contractions. Use colourful papers and present it in a creative manner.

**Q6. ENHANCE YOUR CREATIVE SKILLS:**

**Contractions!**

**I made myself a contraction,**

**As shortened as can be.**

**I thought I'd put two words together**

**Simple, can't you see?**



- # Refer to the picture given and prepare a 'contraction caterpillar' with at least 10 contractions. Use colourful papers and present it in a creative manner.



# GWALIOR GLORY SCHOOL

## SUMMER HOLIDAY HOMEWORK

HINDI (2024-25)

Class : III

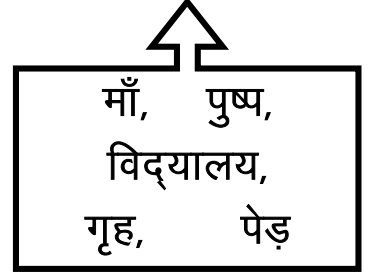
Name : \_\_\_\_\_ Sec. : \_\_\_\_\_ Roll No. : \_\_\_\_\_ Date : \_\_\_\_\_

(1) समान अर्थवाले शब्दों को छाँटकर लिखो:-

वृक्ष x \_\_\_\_\_ माता x \_\_\_\_\_

घर x \_\_\_\_\_ पाठमाला x \_\_\_\_\_

फूल x \_\_\_\_\_



(2) समान तुक वाले शब्दों का मिलान करो:-

(क)

(ख)

1) पीछे \_\_\_\_\_ सँवारे \_\_\_\_\_

2) पसारे \_\_\_\_\_ नीचे \_\_\_\_\_

3) पाओ \_\_\_\_\_ मटका \_\_\_\_\_

4) झटका \_\_\_\_\_ पतीले \_\_\_\_\_

5) रसीले \_\_\_\_\_ जाओ \_\_\_\_\_

(3) उल्टे शब्द ढूँढ़कर लिखो:-

आगे, खोना, नीचे, जागना, उतरो, कल

1) पीछे x \_\_\_\_\_ 4) आज x \_\_\_\_\_

2) ऊपर x \_\_\_\_\_ 5) पाना x \_\_\_\_\_

3) सोना x \_\_\_\_\_ 6) चढ़ो x \_\_\_\_\_

(4) दिन, महीने और साल (वर्ष) द्वारा खाली स्थान भरो:-

1) रविवार का दूसरा नाम \_\_\_\_\_ है।

2) गणतंत्र दिवस \_\_\_\_\_ को मनाया जाता है।

3) साल के पाँचवे महीने का नाम \_\_\_\_\_ है।

4) "श" से शुरू होने वाले दिन \_\_\_\_\_ और \_\_\_\_\_ हैं।

5) मेरा जन्मदिवस \_\_\_\_\_ के महीने में आता है।

(5) बताओ तो जाने:-

- 1) सप्ताह के आखिरी दिन का नाम
- 2) कौन से महीने में 28 दिन होते हैं
- 3) गाँधी जयंती किस महीने में मनाई जाती है

---

---

---

(6) वर्ग पहेली में से महीनों के नाम ढूँढ़िए:-

जु	मा	र्च	अ	ग	स्त	ड
ला	ड	ट	अ	क्तू	ब	र
ई	सि	त	म्ब	र	ल	फ
अ	ह	जू	न	क	प	र
प्रै	म	न	व	न्ब	र	व
ल	दि	स	म्ब	र	म	री
ड	ज	न	व	री	ई	ज

(7) दिए गए दृश्य के बारे में बताइए:- (पाँच वाक्य)

1)

---

---

2)

---

---

3)

---

---

4)

---

---

5)

---

---



(8) भारत के किन्हीं चार राज्यों में रहने वाले लोगों की भाषा लिखो। वेशभूषा एवं खान-पान का चित्र चिपकाए:- (ए4 साइज पेज)

**NOTE:** (1) प्रतिदिन एक पेज सुलेख का अभ्यास करें।

(2) व्याकरण पुस्तक में से विलोम शब्द एवं पर्यायवाची शब्द याद करें।



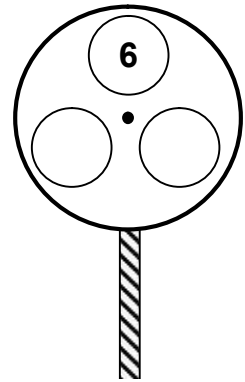
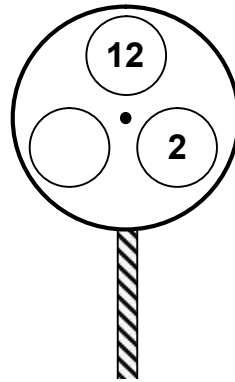
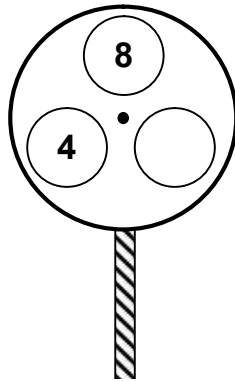
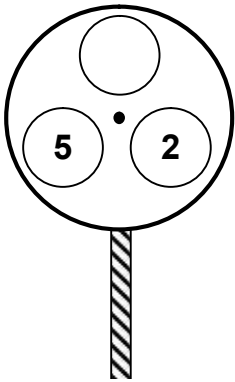
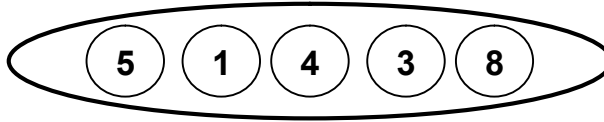
# GWALIOR GLORY SCHOOL

## SUMMER HOLIDAY HOMEWORK MATHEMATICS (2024-25)

Class : III

Name : \_\_\_\_\_ Sec. : \_\_\_\_\_ Roll No. : \_\_\_\_\_ Date : \_\_\_\_\_

- 1) For each set of lollipops choose the correct numbers from the circles on the lollipops so that the total of each lollipop is the same. Each number can be used only ones.



- 2) Read the English newspaper or a magazine for a week and cut out 2 articles in which large number or its number name appears. Cut and stick in the given space and write the following details.

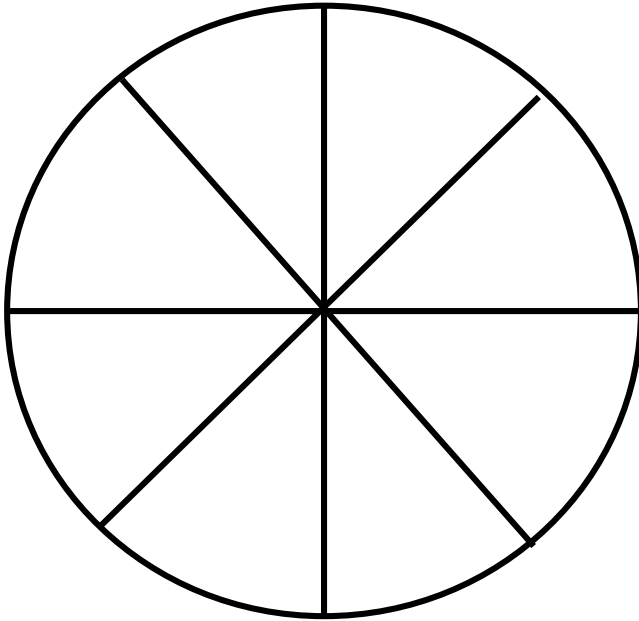
- a) Name of newspaper. \_\_\_\_\_
- b) the date on which the article appeared. \_\_\_\_\_
- c) What does the number refer to? \_\_\_\_\_

3) Read the direction below to make the perfect pizza. Each piece will get only one type of topping.

**Directions :** Follow the steps below to make the perfect pizza.

- a) Add sauce to the whole pizza.
- b) Add tomatoes to  $\frac{4}{8}$  of the pizza.
- c) Add mushrooms to  $\frac{1}{8}$  of the pizza
- d) Add olives to  $\frac{2}{8}$  of the pizza.
- e) Add bell peppers to  $\frac{1}{8}$  of the pizza.

Draw or paste the picture of Olives, mushrooms, tomatoes and bell peppers.



4) Write 2 letters and 2 digits which do not change in the mirror image also.

Example:      **A** | **A**

**Letters**

**Numbers**

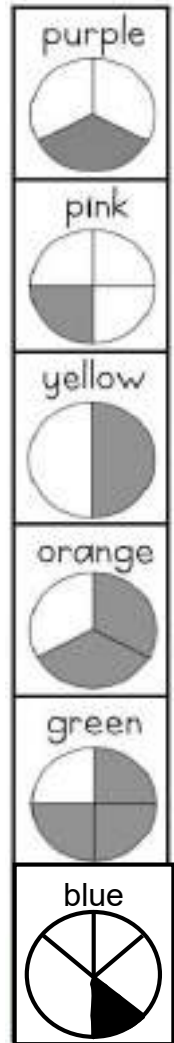

1

2



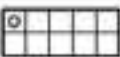



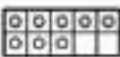


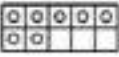












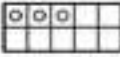


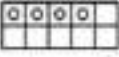



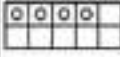




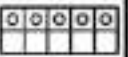






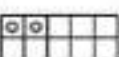










7) Directions: Use the fraction colour code to colour the picture.



8) Directions: Help the butterfly find his way to the flower. Colour all the spaces that have the value of 1, 2, or 3.

 Start							
							
							
							
							
							

# **GWALIOR GLORY SCHOOL**

Class : III

SUMMER HOLIDAY HOMEWORK (2024-25)

SCIENCE

Name : \_\_\_\_\_ Sec. : \_\_\_\_\_ Roll No. : \_\_\_\_\_ Date : \_\_\_\_\_

Below given project will be marked for Term-1

- 1) To prepare a 3-D model of photosynthesis. (Link will be shared for reference). <https://youtu.be/hUh1ExVxRpU?si=HUseIHkFtevXgQfU>
- 2) Prepare a project report about the following birds. Stick their picture and write 3 facts about them:- (To be done on A4 Sheets)
  - a) Spoon bill
  - b) Tailor bird
  - c) Arctic Tern
  - d) Woodpecker
  - e) Penguin
- 3) Worksheets to be completed.

# **GWALIOR GLORY SCHOOL**

Class : III

SUMMER HOLIDAY HOMEWORK (2024-25)

SCIENCE

Name : \_\_\_\_\_ Sec. : \_\_\_\_\_ Roll No. : \_\_\_\_\_ Date : \_\_\_\_\_

Below given project will be marked for Term-1

- 1) To prepare a 3-D model of photosynthesis. (Link will be shared for reference). <https://youtu.be/hUh1ExVxRpU?si=HUseIHkFtevXgQfU>
- 2) Prepare a project report about the following birds. Stick their picture and write 3 facts about them:- (To be done on A4 Sheets)
  - a) Spoon bill
  - b) Tailor bird
  - c) Arctic Tern
  - d) Woodpecker
  - e) Penguin
- 3) Worksheets to be completed.

# **GWALIOR GLORY SCHOOL**

Class : III

SUMMER HOLIDAY HOMEWORK (2024-25)

SCIENCE

Name : \_\_\_\_\_ Sec. : \_\_\_\_\_ Roll No. : \_\_\_\_\_ Date : \_\_\_\_\_

Below given project will be marked for Term-1

- 1) To prepare a 3-D model of photosynthesis. (Link will be shared for reference). <https://youtu.be/hUh1ExVxRpU?si=HUseIHkFtevXgQfU>
- 2) Prepare a project report about the following birds. Stick their picture and write 3 facts about them:- (To be done on A4 Sheets)
  - a) Spoon bill
  - b) Tailor bird
  - c) Arctic Tern
  - d) Woodpecker
  - e) Penguin
- 3) Worksheets to be completed.



# Gwalior Glory School

Class : III

SCIENCE HOLIDAY HOMEWORK [2024-25]

Worksheet-1

Name : \_\_\_\_\_ Sec. : \_\_\_\_\_ Roll No. : \_\_\_\_\_ Date : \_\_\_\_\_

## BASED ON PLANTS WORD SEARCH

Q1 Find the below mentioned words from the grid:-

Z	T	S	G	Q	I	H	T	U	K	Q	G	Y	D	C	B	I	C	E	A
Y	X	T	N	G	E	P	P	A	W	R	E	B	S	N	R	V	T	D	O
D	D	K	I	K	X	A	G	L	G	R	V	S	T	E	M	A	Q	K	G
J	S	M	L	L	W	S	B	D	E	T	M	Z	K	F	N	J	G	B	S
A	D	O	D	S	B	G	Q	W	R	A	R	D	Z	I	A	I	R	E	V
H	O	I	E	K	O	F	O	V	R	M	P	E	M	R	D	S	V	Q	O
T	O	S	E	K	P	L	I	V	O	I	R	R	E	F	G	A	Z	D	Y
W	F	T	S	A	F	H	X	W	O	E	E	B	V	S	E	G	C	N	N
O	W	U	Z	K	F	E	O	Y	T	G	C	H	L	L	N	O	S	E	W
R	G	R	P	E	Z	O	T	T	S	Z	K	S	U	N	L	I	G	H	T
G	M	E	W	S	J	I	D	O	O	Z	U	Q	Z	C	O	Y	B	N	D
S	H	F	I	I	R	R	I	G	B	S	I	J	S	M	X	B	G	D	F
D	U	M	Q	U	Y	K	U	N	A	A	Y	N	N	O	I	I	A	R	Y
L	T	G	T	W	U	X	N	W	I	N	D	N	C	J	C	V	E	A	K
I	P	A	U	P	L	A	N	T	Z	H	E	Q	T	P	X	T	Y	V	B
O	M	C	E	W	R	E	P	R	O	D	U	C	E	H	A	V	E	U	S
S	M	U	R	E	Z	X	P	N	T	I	F	N	W	W	E	B	D	P	G
H	S	J	L	I	S	F	O	C	F	K	H	Q	A	C	G	S	W	C	Y
X	T	I	S	C	P	R	J	M	Q	E	C	S	W	T	W	H	I	C	U
B	D	G	D	O	D	C	O	V	D	W	A	J	Y	M	P	N	W	S	V

Water

Oxygen

reproduce

roots

food

plant

trees

sunlight

soil

maturity

photosynthesis

seedling

moisture

leaves

air

flower

wind

stem

germinate

growth

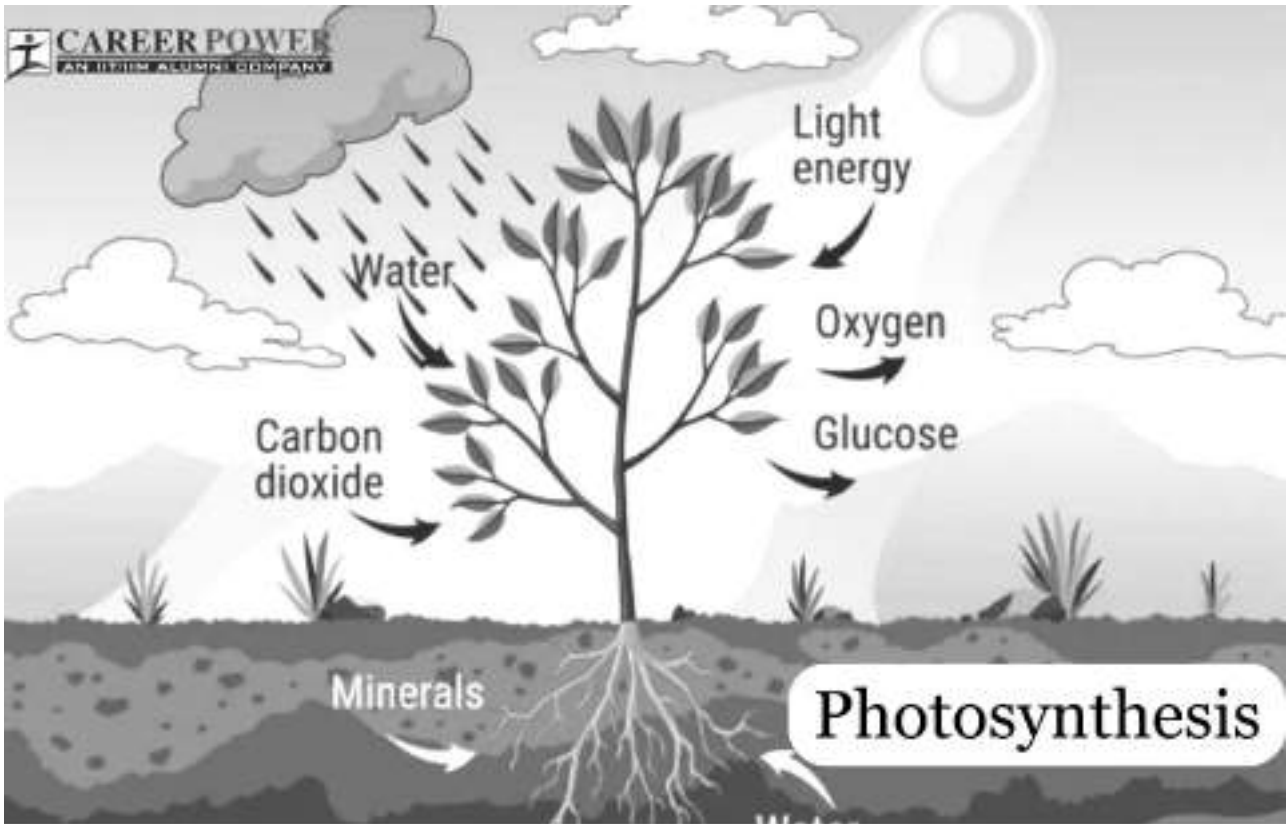




Name : \_\_\_\_\_ Sec. : \_\_\_\_\_ Roll No. : \_\_\_\_\_ Date : \_\_\_\_\_

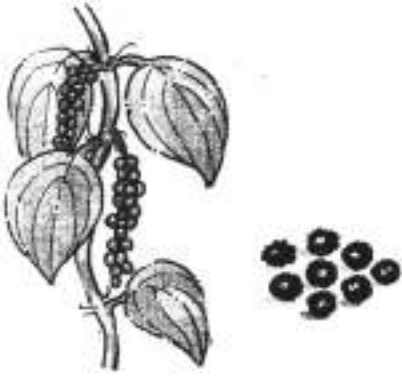
## BASED ON WHAT IS PHOTOSYNTHESIS

Q) Complete the paragraph given below with the help of the diagram:-



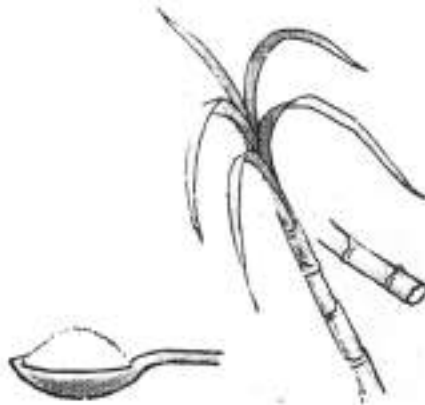
P\_\_\_\_\_ is the process by which plants produce their own food in the presence of s\_\_\_\_\_, w\_\_\_\_\_, and c\_\_\_\_\_. Photosynthesis takes place in g\_\_\_\_\_ l\_\_\_\_\_ of the plants. Plants contain a green pigment called a c\_\_\_\_\_ that absorbs sunlight. Energy from the sun, carbon dioxide from the atmosphere and water absorbed by the roots react to produce g\_\_\_\_\_ that plants need to survive. O\_\_\_\_\_ is a gas that is released into the environment for animals and humans to breathe.

Q) **PLANT FEAST**: Which part of the plant do we use when we eat these?  
Choose and write.



1. black pepper

---



2. sugarcane

---



3. ginger

---



4. turmeric

---



5. tea

---



6. coffee

---



7. curry leaves

---



8. cloves

---



9. almonds

---



10. raisins

---

# GWALIOR GLORY SCHOOL

Class : III

SUMMER HOLIDAY HOMEWORK (2024-25)

SOCIAL SCIENCE

Name : \_\_\_\_\_ Sec. : \_\_\_\_\_ Roll No. : \_\_\_\_\_ Date : \_\_\_\_\_

- PROJECT** –
- Do any 1 project
  - Submit the project by **10<sup>th</sup> July'24**.
  - Project carries 10 marks and will be marked for **Term-1**

(1) **Make a flipbook or cutout showing the layers of the earth. [refer the picture provided]**



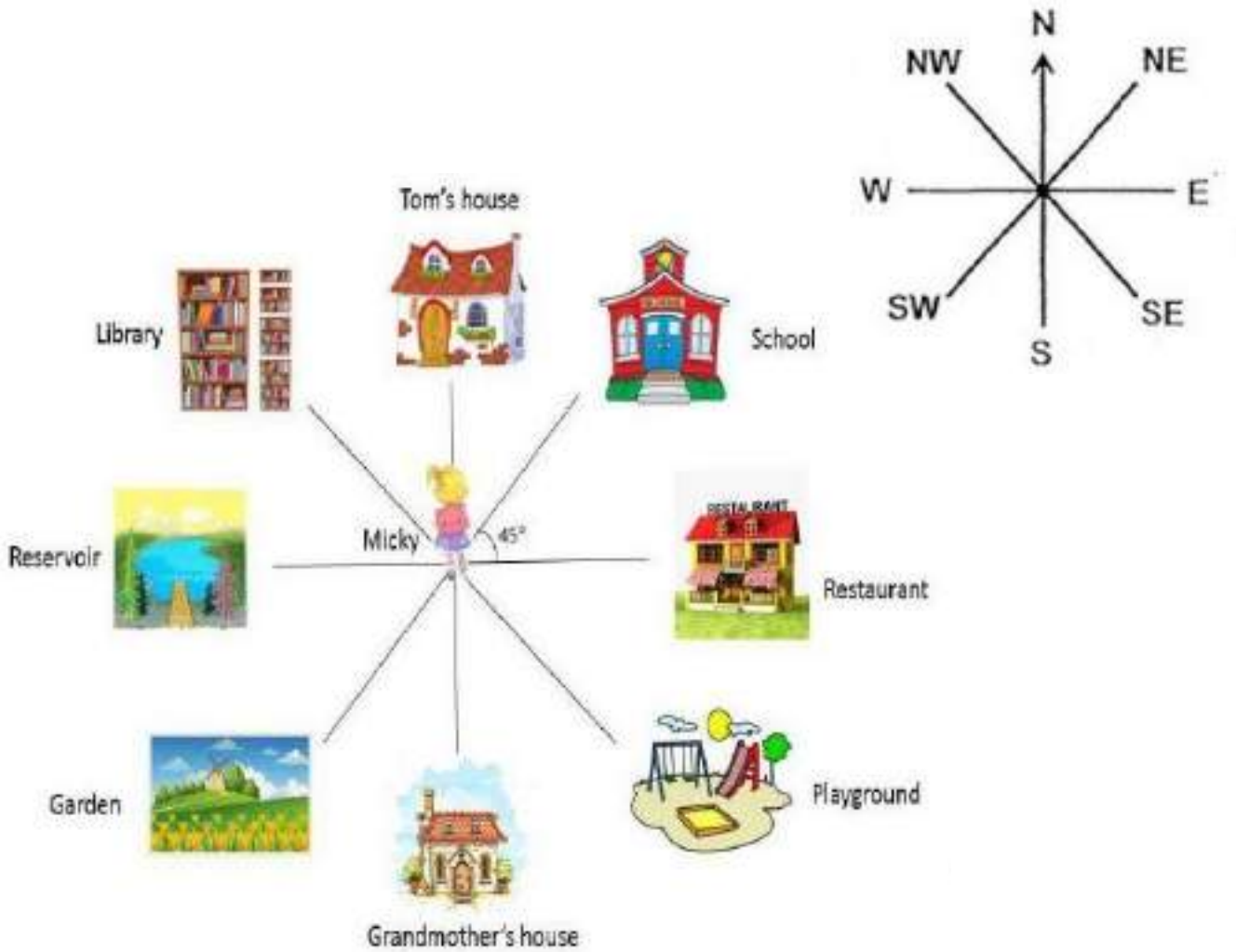
**OR**

**Select any 1 state of your choice from (Madhya Pradesh, Rajasthan, Goa) and prepare an album covering the following points.**

- |                                       |                                  |
|---------------------------------------|----------------------------------|
| # Name of state                       | # Area of state                  |
| # Language                            | # Climate and main occupation    |
| # Traditional costume, dance and food | # Other specialties of the state |

(2) Let's practice the compass direction identification.

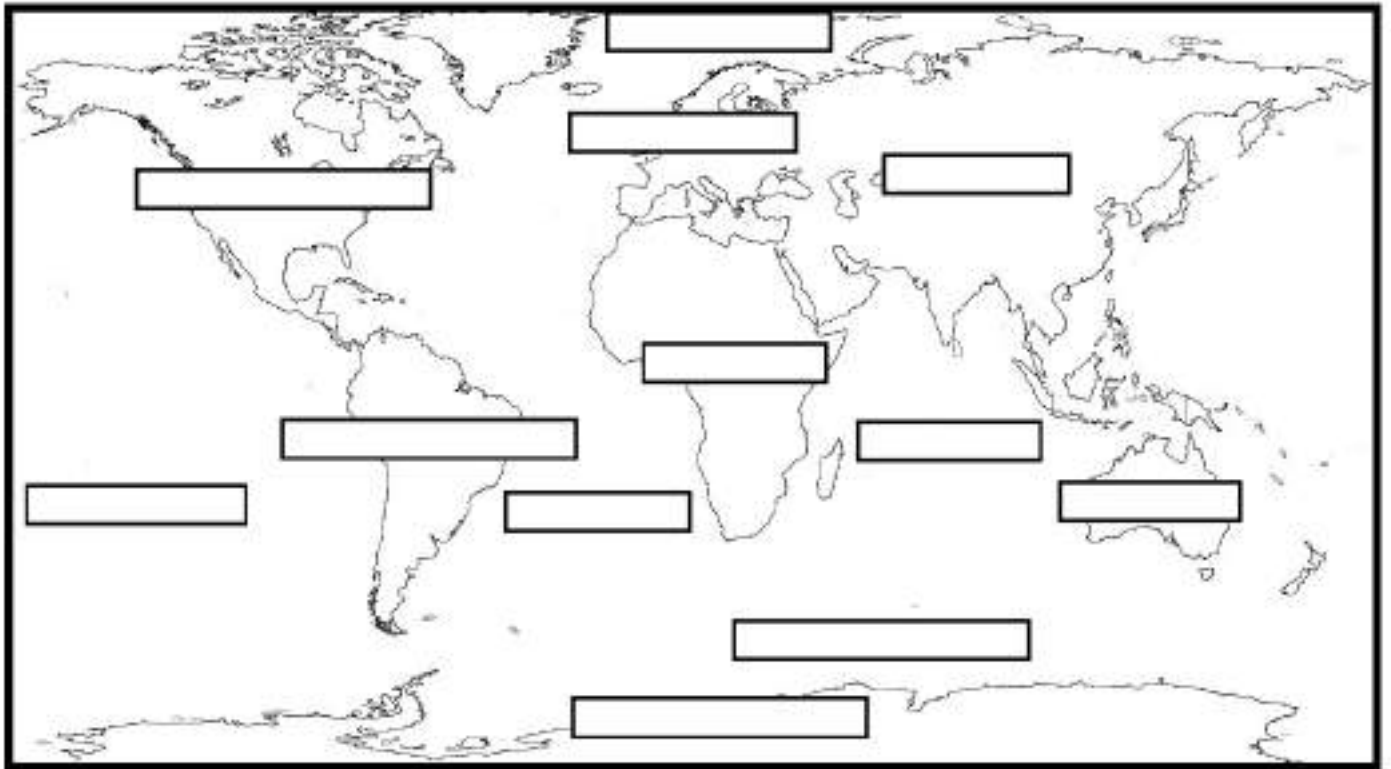
Topic: The Eight Point Compass



Use the Eight Point Compass to tell Micky's location. Then write your answer in the direction box. **(TYPE ANSWER USING CAPS LOCK)**

Micky's location		Direction
1.	Micky goes to school.	
2.	She goes to the restaurant.	
3.	Micky goes to her grandmother's house.	
4.	Her friend Tom wants her to come over to his house.	
5.	Micky's family goes to the reservoir.	
6.	She wants to play at the playground.	
7.	On Sunday, Micky's family goes to visit the garden.	
8.	Micky is going the library to borrow some books.	


(3) Label the continents and ocean using the words below as a guide. Then find each word in the jumble word grid.



- Africa
- Antarctica
- Asia
- Australia
- Europe
- North America
- South America
  
- Pacific Ocean
- Indian Ocean
- Atlantic Ocean
- Arctic Ocean
- Southern Ocean



- (4) Make a poster on 'Save our beach' in the space provided. Write a slogan and mention few ways in which you can save the marine life.



**Ways to save the marine life.**

- 1) \_\_\_\_\_  
\_\_\_\_\_
- 2) \_\_\_\_\_  
\_\_\_\_\_
- 3) \_\_\_\_\_  
\_\_\_\_\_

# GWALIOR GLORY SCHOOL

## SUMMER HOLIDAY HOMEWORK

GK (2024-25)

Class : III

Name : \_\_\_\_\_ Sec. : \_\_\_\_\_ Roll No. : \_\_\_\_\_ Date : \_\_\_\_\_

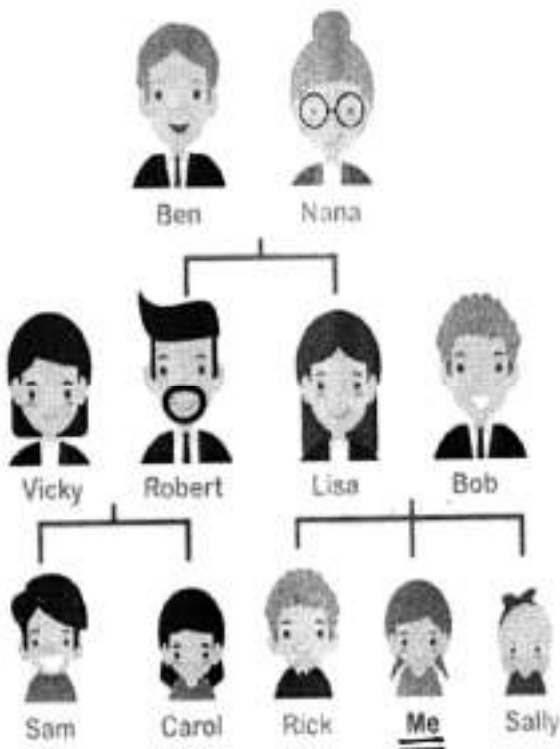
1) 'Currency is the medium to exchange goods & service'.

Given below are the names of few world currencies. Draw the symbol used to represent these currencies and mention the country to which they belong.

	Currency	Symbol	Country
a)	Rupee		
b)	Dollar		
c)	Yen		
d)	Euro		
e)	Kips		
f)	Pound		
g)	Franc		
h)	Rand		
i)	Lira		
j)	Won		

2) Study the family tree carefully and complete the blanks.

Brother    aunt    mother    grandfather    uncle    children    father  
 parents    grandmother    sister    cousins    grandparents



Nana is my \_\_\_\_\_.

Bob is my \_\_\_\_\_.

Sally is my \_\_\_\_\_.

Lisa is my \_\_\_\_\_.

Bob and Lisa are my \_\_\_\_\_.

Vicky is my \_\_\_\_\_.

Sam and Carol are my \_\_\_\_\_.

Ben is my \_\_\_\_\_.

Rick is my \_\_\_\_\_.

Robert is my \_\_\_\_\_.










Ben and Nana are my \_\_\_\_\_.














Me, Rick and Sally are \_\_\_\_\_.












3) Decode the puzzle solve and find the capital of the countries.
















Here is my secret code.














A		E		I		M		Q		U		Y	
B		F		J		N		R		W		Z	
C		G		K		O		S		V			
D		H		L		P		T		X			

















\_\_\_\_\_ is the capital of \_\_\_\_\_  
    \_\_\_\_\_  
    
















\_\_\_\_\_ is the capital of \_\_\_\_\_  
      \_\_\_\_\_  
      













\_\_\_\_\_ is the capital of \_\_\_\_\_  
      \_\_\_\_\_  
    


















\_\_\_\_\_ is the capital of \_\_\_\_\_  
        \_\_\_\_\_  
      













\_\_\_\_\_ is the capital of \_\_\_\_\_  
      \_\_\_\_\_  
      





















\_\_\_\_\_ is the capital of \_\_\_\_\_  
         \_\_\_\_\_  
      













\_\_\_\_\_ is the capital of \_\_\_\_\_  
        \_\_\_\_\_  
      

\_\_\_\_\_ is the capital of \_\_\_\_\_  
      \_\_\_\_\_  
     

\_\_\_\_\_ is the capital of \_\_\_\_\_  
        \_\_\_\_\_  
        

\_\_\_\_\_ is the capital of \_\_\_\_\_  
      \_\_\_\_\_  
     

\_\_\_\_\_ is the capital of \_\_\_\_\_  
          \_\_\_\_\_  
         

\_\_\_\_\_ is the capital of \_\_\_\_\_  
       \_\_\_\_\_  
    

\_\_\_\_\_ is the capital of \_\_\_\_\_  
        \_\_\_\_\_  
    



**4) Find out the full forms of the given abbreviations:-**

- a) AIR : \_\_\_\_\_
- b) RBI : \_\_\_\_\_
- c) NCC : \_\_\_\_\_
- d) NDA : \_\_\_\_\_
- e) STD : \_\_\_\_\_
- f) CBI : \_\_\_\_\_
- g) IAS : \_\_\_\_\_
- h) FCI : \_\_\_\_\_
- i) IST : \_\_\_\_\_
- j) MLA : \_\_\_\_\_
- k) UAE : \_\_\_\_\_
- l) WHO: \_\_\_\_\_
- m) BSF : \_\_\_\_\_
- n) VAT : \_\_\_\_\_
- o) CNG : \_\_\_\_\_
- p) NRI : \_\_\_\_\_
- q) PAN : \_\_\_\_\_
- r) ATM : \_\_\_\_\_
- s) DELL: \_\_\_\_\_



# **GWALIOR GLORY SCHOOL**

Class : III

## **SUMMER HOLIDAY HOMEWORK COMPUTER (2024-25)**

Name : \_\_\_\_\_ Sec. : \_\_\_\_\_ Roll No. : \_\_\_\_\_ Date : \_\_\_\_\_

- ◆ Prepare a scrapbook on the significance of Yoga and Hand Mudras, which maintain five elements of our body.  
i.e. ( Vayu, Agni, Jal, Prithvi, Akash )
- 

# **GWALIOR GLORY SCHOOL**

Class : III

## **SUMMER HOLIDAY HOMEWORK COMPUTER (2024-25)**

Name : \_\_\_\_\_ Sec. : \_\_\_\_\_ Roll No. : \_\_\_\_\_ Date : \_\_\_\_\_

- ◆ Prepare a scrapbook on the significance of Yoga and Hand Mudras, which maintain five elements of our body.  
i.e. ( Vayu, Agni, Jal, Prithvi, Akash )
- 

# **GWALIOR GLORY SCHOOL**

Class : III

## **SUMMER HOLIDAY HOMEWORK COMPUTER (2024-25)**

Name : \_\_\_\_\_ Sec. : \_\_\_\_\_ Roll No. : \_\_\_\_\_ Date : \_\_\_\_\_

- ◆ Prepare a scrapbook on the significance of Yoga and Hand Mudras, which maintain five elements of our body.  
i.e. ( Vayu, Agni, Jal, Prithvi, Akash )
- 

# **GWALIOR GLORY SCHOOL**

Class : III

## **SUMMER HOLIDAY HOMEWORK COMPUTER (2024-25)**

Name : \_\_\_\_\_ Sec. : \_\_\_\_\_ Roll No. : \_\_\_\_\_ Date : \_\_\_\_\_

- ◆ Prepare a scrapbook on the significance of Yoga and Hand Mudras, which maintain five elements of our body.  
i.e. ( Vayu, Agni, Jal, Prithvi, Akash )

# GWALIOR GLORY SCHOOL

Class : III

SUMMER HOLIDAY HOMEWORK (2024-25)

Art & Craft

Name : \_\_\_\_\_ Sec. : \_\_\_\_\_ Roll No. : \_\_\_\_\_ Date : \_\_\_\_\_

## CRAFT:

- 1) Make five creative "bookmark".
- 2) Make beautiful dry "leaf art". (example-1 given below)

## ART:

- 1) Draw doodle art "Ganesh". (example-2 given below)
- 2) Draw Poster "Save Water". (example-3 given below)
- 3) Draw "Warli art" drawing. (example-4 given below)

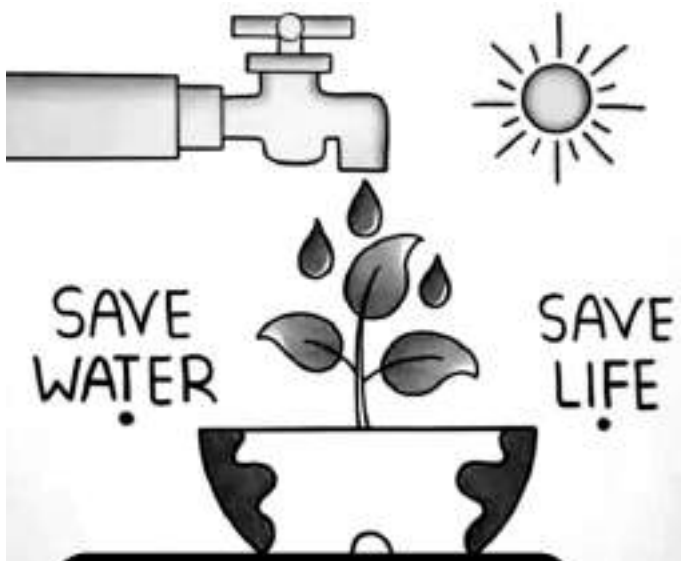
**NOTE:** Art work should be done in drawing notebook.



Example-1



Example-2



Example-3



Example-4